

Class V

Day 2

Practice Questions For Bridge Course

Solve these questions on loose sheets

Q1) Arrange And Add:-

(a) 6,245 ; 6,45,200 ; 34,800

(b) 22,222 ; 2,222 ; 2,22,222

Q2) Subtract And Check:-

(a) 81,456 - 62,581

(b) 90,000 - 45,865

Q3) Find The Difference:-

(a) 64,583 And 54,321




















(b) 81,650 And 92,545

Bridge Course

Day-2

ਵਰਨਮਾਲਾ

* ਏ-ੳ ਤੌਰ ਖਾਲੀ ਥਾਂਵਾਂ ਭਰੋ :-

ੳ		ੲ		ੳ
	ੲ		ੳ	
ੲ		ੳ		ੲ
	ੳ		ੲ	
ੲ		ੲ		ੳ
	ੲ	ੲ	ੲ	
ੲ		ੲ		
ੲ		ੲ		ੲ
		ੲ		

Worksheet 1

Class V

Name _____ Date _____

Tap Root & Fibrous Root



A



B

Which type of roots do you see in the diagrams above ?

A _____ B _____

Fill the table below:

	Tap Root	Fibrous Root
Similarity		
Difference		
Example		

Circle the plants with tap roots in **red** and the ones with fibrous roots in **green**.

tomato rice hibiscus wheat grass corn
bean pea carrot oak palm mango