

CLASS IV MATHEMATICS (PRACTICE QUESTIONS)

Q.1 Write number names

- a) 69
- b) 463
- c) 7256
- d) 9099

Q.2 Write numerals

- a) Thirty seven
- b) One hundred six
- c) Seven thousand fifty three
- d) Eight thousand four hundred five

Q. 3 Write the place value of underlined digit

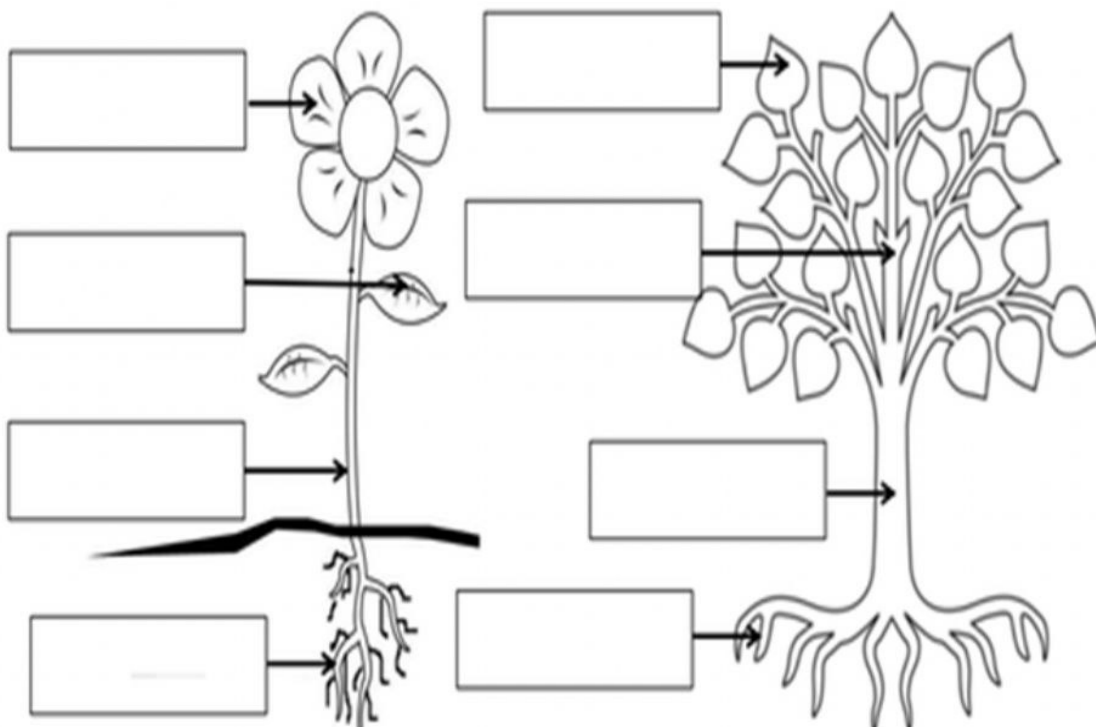
- a) 3467
- b) 9641
- c) 2875
- d) 3063

Topic : Plants

Class :IV

Identify the parts of plants

Roots	Branch	Leaf	Trunk	Stem	Petal
-------	--------	------	-------	------	-------



Q2:Give examples of each:

Two roots we eat :-----,-----

Two leaves we eat:-----,-----

Two flowers we eat :-----,-----

Two seeds we eat :-----,-----



















Two stems we eat :-----,-----

Bridge Course

Day-2

ਵਰਨਮਾਲਾ

* ਈ-ਲ਼ ਤੌਰ ਖਾਲੀ ਥਾਂਵਾਂ ਭਰੋ :-

ਈ		ੲ		ੳ
	ਖ		ਘ	
ਬ		ਙ		ਞ
	ਮ		ਸ਼	
ੲ		ੳ		ਮ
	ਨ	ਬ	ਯ	
ੲ		ੲ		ੳ
ੳ		ੳ		ੳ
		ੳ		